

# Numbers from Twenty-one to Fifty



0119CH08

Fill in the blanks.

18

Write the number.

Draw the bundles and ones.

TEN ONES

TEN ONES

1 4

14

TEN ONES

TEN ONES

1 5

15

TEN ONES

TEN ONES

0

TENS ONES

TENS ONES

2 0

20

TEN ONES

TEN ONES

0

TENS ONES


TENS ONES

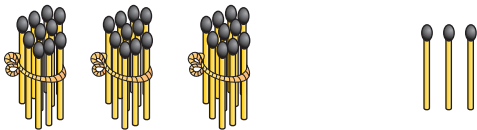
2 2


22

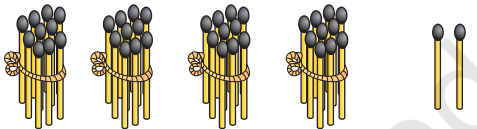



# Write the number

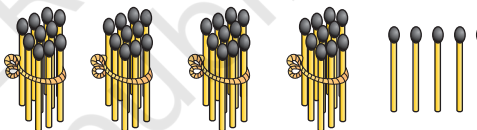
  
 TENS ONES  
 2 5 25

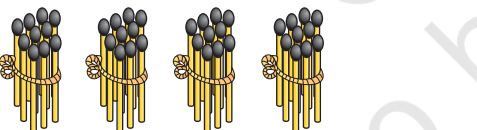
  
 TENS ONES  
 3 3 33


  
 TENS ONES  
 2 3

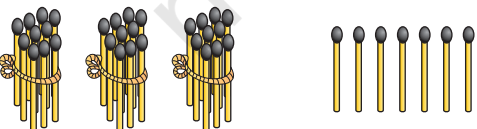
  
 TENS ONES  
 4 2

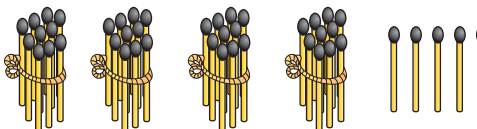
  
 TENS ONES

  
 TENS ONES

  
 TENS ONES

  
 TENS ONES

  
 TENS ONES

  
 TENS ONES





# Numbers from 21 to 40


Fill in the blanks.


21


2 TENS                      1 ONE


31

3 TENS                      1 ONE


22

2 TENS                      2 ONES




3 TENS                      2 ONES


23

2 TENS                      3 ONES




3 TENS                      3 ONES



2 TENS                      4 ONES




3 TENS                      4 ONES




2 TENS                      5 ONES




3 TENS                      5 ONES




2 TENS                      6 ONES


36

3 TENS                      6 ONES


27


2 TENS                      7 ONES




3 TENS                      7 ONES


28

2 TENS                      8 ONES


38


3 TENS                      8 ONES


29


2 TENS                      9 ONES


39

3 TENS                      9 ONES


30

2 TENS                      1 TEN

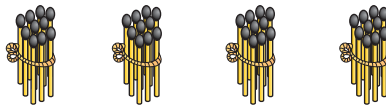

40

3 TENS                      1 TEN



# Numbers from 41 to 50

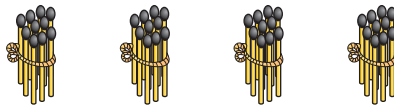
Fill in the blanks.



41

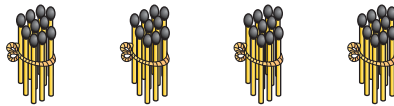
4 TENS

1 ONE



4 TENS

2 ONES



4 TENS

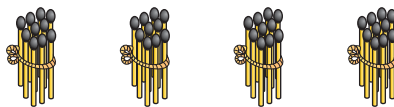
3 ONES



43

4 TENS

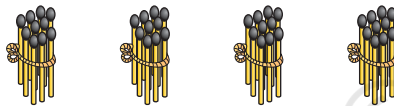
4 ONES



4 TENS

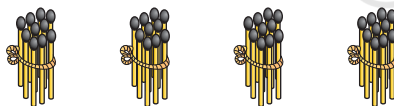
5 ONES

45



4 TENS

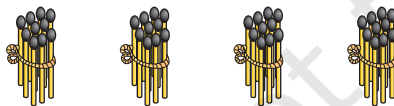
6 ONES



4 TENS

7 ONES

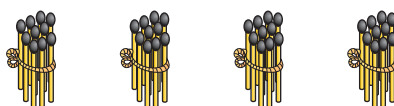
47



4 TENS

8 ONES

48



4 TENS

1 Ten

50





Write the missing numbers

1	2	3	4	5	6	7	8	9	10
11		13			16				
	22					27			
							38		
		43						49	

