

Subtraction



0119CH04

Take Away



5



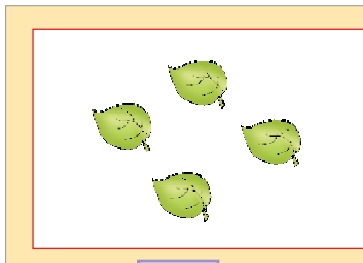
Take away

2

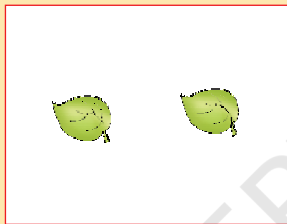


Left

3



4




Take away

2





Left



Take away



Left



Take Away



Left



Teachers Note

Refer to page no. 141 to develop understanding of subtraction.






Subtraction






$$6 - 4 = 2$$



$$5 - 2 = \square$$



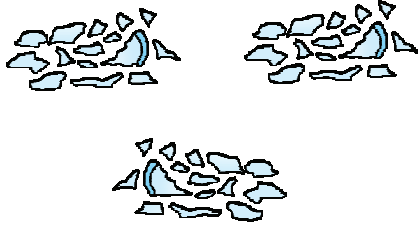

$$9 - 4 = \square$$



$$5 - 1 = \square$$





Subtraction






-

=




-

=



-

=




-

=







Subtraction



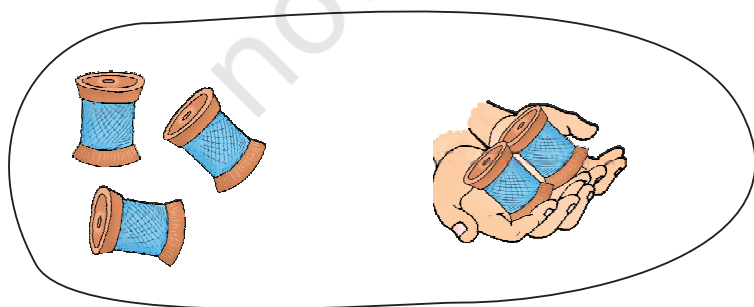
$$3 - 1 = 2$$



$$\square - \square = \square$$



$$\square - \square = \square$$



$$\square - \square = \square$$

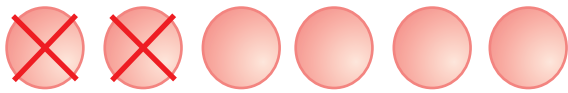


Subtraction



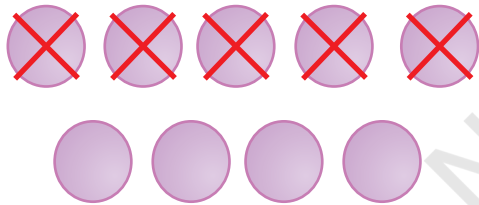
$5 - 4 = \boxed{1}$

$$\begin{array}{r} 5 \\ - 4 \\ \hline 1 \end{array}$$




$6 - 2 = \boxed{}$

$$\begin{array}{r} 6 \\ - 2 \\ \hline \end{array}$$



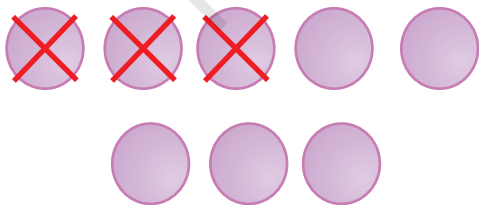
$9 - 5 = \boxed{}$

$$\begin{array}{r} 9 \\ - 5 \\ \hline \end{array}$$



$4 - 4 = \boxed{}$

$$\begin{array}{r} 4 \\ - 4 \\ \hline \end{array}$$



$8 - 3 = \boxed{}$

$$\begin{array}{r} 8 \\ - 3 \\ \hline \end{array}$$





Subtract and Match

$4 - 2$

3

$9 - 5$

$7 - 2$

4

$8 - 2$

$9 - 1$

2

$7 - 4$

$5 - 1$

5

$8 - 0$

$6 - 3$

6

$5 - 3$

$7 - 1$

8

$8 - 3$

$5 - 0$

0

$7 - 7$



Subtract

$4 - 2 = \boxed{2}$

$4 - 0 = \boxed{}$

$5 - 2 = \boxed{}$

$6 - 5 = \boxed{}$

$7 - 7 = \boxed{}$

$8 - 4 = \boxed{}$

$3 - 1 = \boxed{}$



$$\begin{array}{r} 2 \\ - 0 \\ \hline \boxed{2} \end{array}$$

$$\begin{array}{r} 9 \\ - 7 \\ \hline \boxed{} \end{array}$$

$$\begin{array}{r} 3 \\ - 0 \\ \hline \boxed{} \end{array}$$

$$\begin{array}{r} 8 \\ - 8 \\ \hline \boxed{} \end{array}$$

$$\begin{array}{r} 6 \\ - 4 \\ \hline \boxed{} \end{array}$$

$$\begin{array}{r} 4 \\ - 2 \\ \hline \boxed{} \end{array}$$





Write the missing numbers

$$8 - \square = 7$$

$$\square - 2 = 3$$

$$5 - \square = 1$$

$$\square - 3 = 5$$

$$3 - \square = 3$$

$$\square - 2 = 0$$

$$9 - 2 = \square$$

$$\square - 2 = 7$$

